

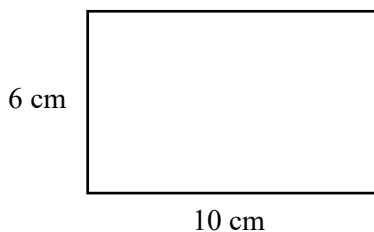


# Area of Shapes



REVISE THIS  
TOPIC

1



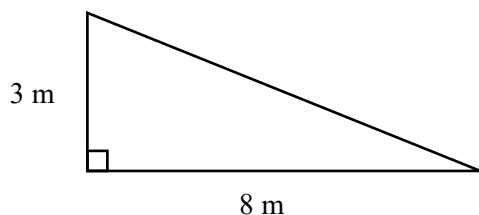
Work out the area of the rectangle giving the units of your answer.

$$6 \times 10$$

$$60 \text{ cm}^2$$

(Total for Question 1 is 2 marks)

2



Work out the area of the triangle giving the units of your answer.

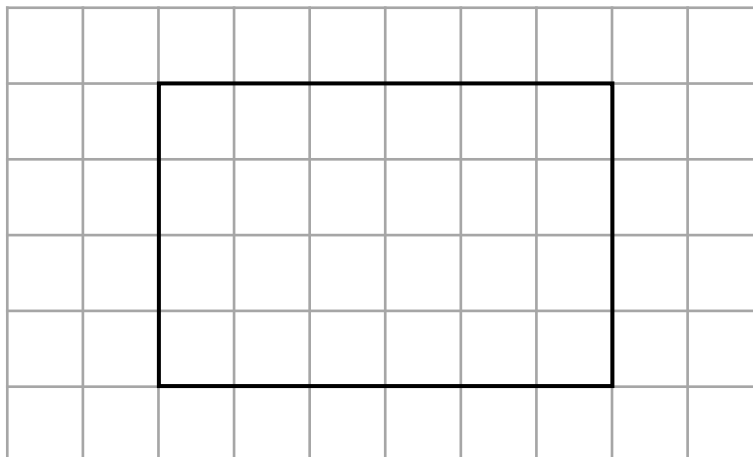
$$\frac{1}{2} \times 8 \times 3$$

$$12 \text{ m}^2$$

(Total for Question 2 is 2 marks)



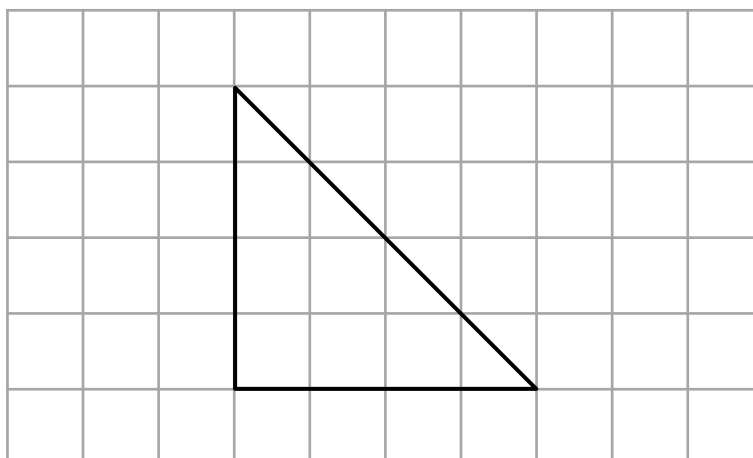
3 A rectangle is drawn on a centimetre grid.



(a) Work out the area of the rectangle.

.....<sup>24</sup>.....cm<sup>2</sup>  
 (1)

A triangle is drawn on a centimetre grid.



(b) Work out the area of the triangle.

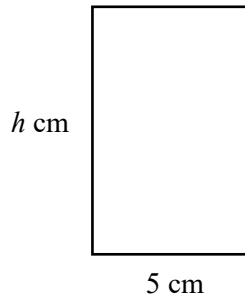
.....<sup>8</sup>.....cm<sup>2</sup>  
 (1)

(Total for Question 3 is 2 marks)





- 4 The rectangle has a base of 5 cm and a height of  $h$  cm.



The area of the rectangle is  $40 \text{ cm}^2$   
Work out the value of  $h$ .

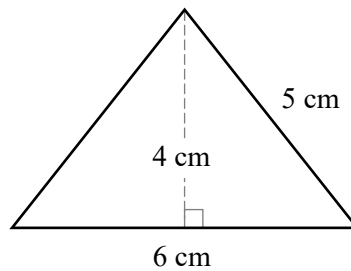
$$40 \div 5$$

8

..... cm

(Total for Question 4 is 1 mark)

5



Work out the area of the triangle.

$$\frac{1}{2} \times 6 \times 4$$

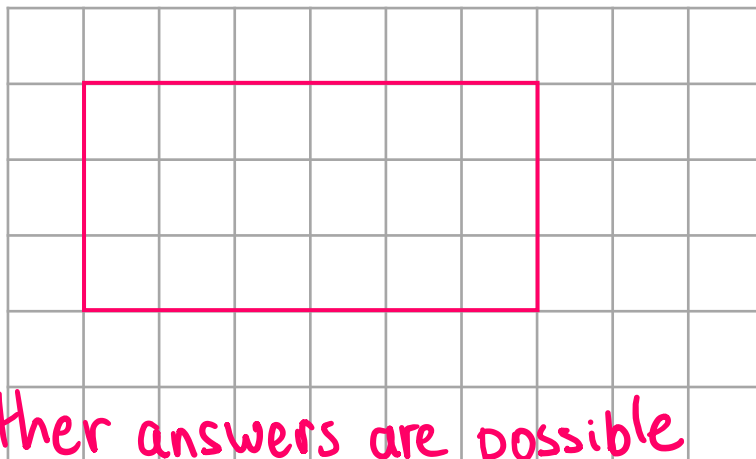
12

.....  $\text{cm}^2$

(Total for Question 5 is 2 marks)

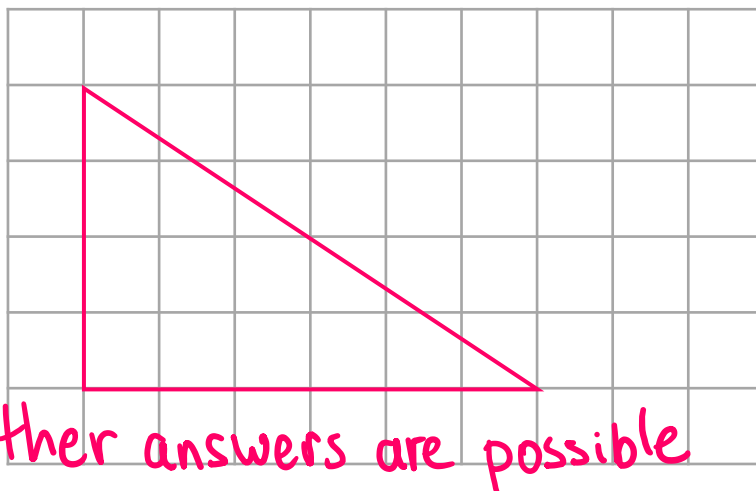


- 6 (a) On the centimetre grid below, draw a rectangle with an area of  $18 \text{ cm}^2$



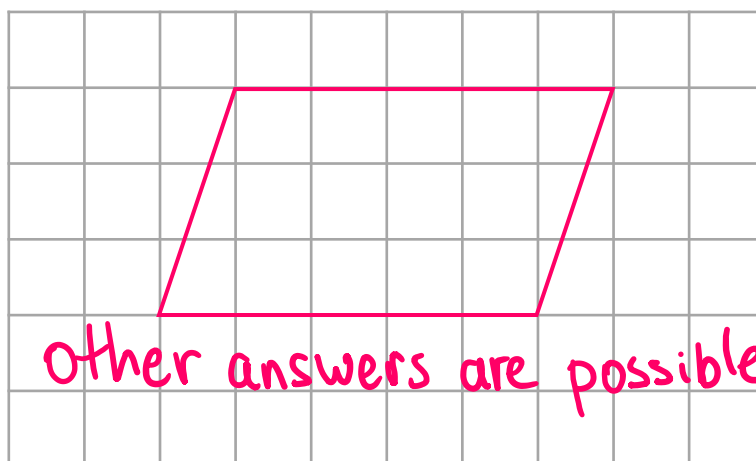
(1)

- (b) On the centimetre grid below, draw a triangle with an area of  $12 \text{ cm}^2$



(1)

- (c) On the centimetre grid below, draw a parallelogram with an area of  $15 \text{ cm}^2$



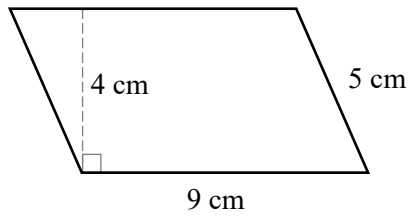
(1)

(Total for Question 6 is 3 marks)





7



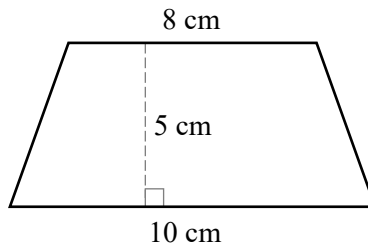
Work out the area of the parallelogram.

$$9 \times 4$$

36.....cm<sup>2</sup>

(Total for Question 7 is 2 marks)

8



Work out the area of the trapezium.

$$\begin{aligned} & \frac{1}{2}(8 + 10) \times 5 \\ &= \frac{1}{2}(18) \times 5 \\ &= 9 \times 5 \end{aligned}$$

45.....cm<sup>2</sup>

(Total for Question 8 is 2 marks)

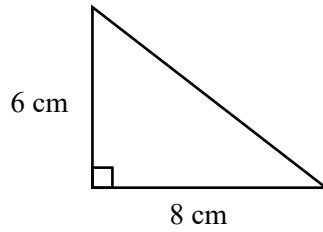


9 Here is a square, triangle and parallelogram.

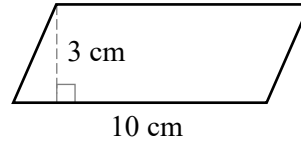
Square



Triangle



Parallelogram



Put the shapes in order of area, starting with the smallest.

Square  $5 \times 5 = 25 \text{ cm}^2$

Triangle  $\frac{1}{2} \times 8 \times 6 = 24 \text{ cm}^2$

Parallelogram  $10 \times 3 = 30 \text{ cm}^2$

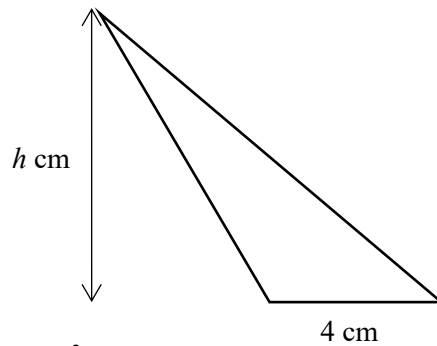
Triangle Square Parallelogram

(Total for Question 9 is 3 marks)





10 A triangle has a base of 4 cm and a perpendicular height of  $h$  cm.



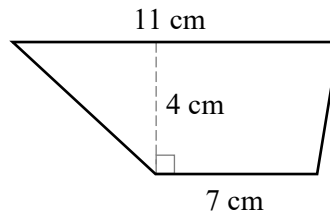
The area of the triangle is  $20 \text{ cm}^2$   
Work out the value of  $h$ .

$$\begin{aligned}\frac{1}{2} \times 4 \times h &= 20 \\ 2h &= 20 \\ h &= 10\end{aligned}$$

$$h = \text{.....} \text{10} \text{ cm}$$

(Total for Question 10 is 2 marks)

11



Work out the area of the trapezium.

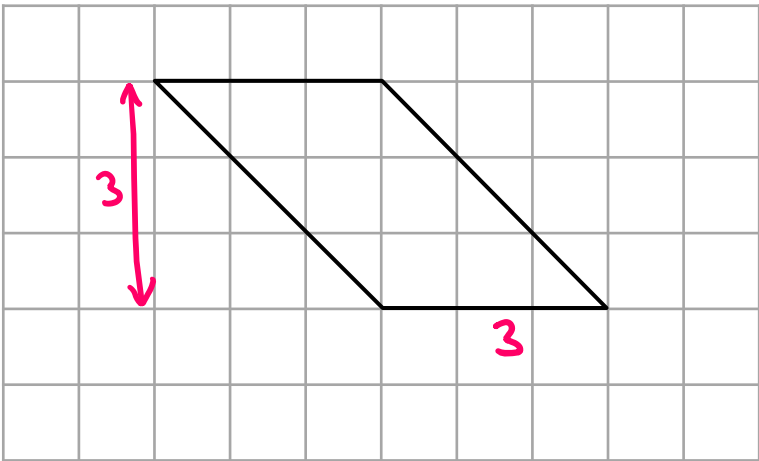
$$\begin{aligned}\frac{1}{2}(7 + 11) \times 4 \\ = \frac{1}{2}(18) \times 4 \\ = 9 \times 4\end{aligned}$$

$$\text{.....} \text{36} \text{ cm}^2$$

(Total for Question 11 is 2 marks)



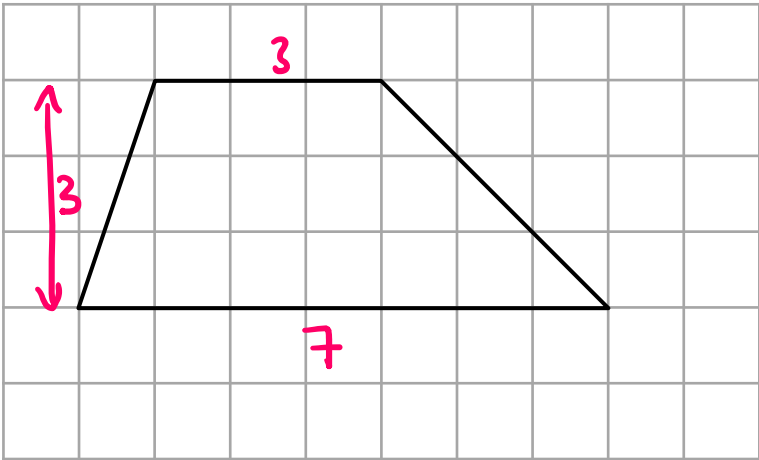
12 A parallelogram is drawn on a centimetre grid.



(a) Work out the area of the parallelogram.

.....9.....cm<sup>2</sup>  
 (1)

A trapezium is drawn on a centimetre grid.



(b) Work out the area of the trapezium.

.....15.....cm<sup>2</sup>  
 (2)

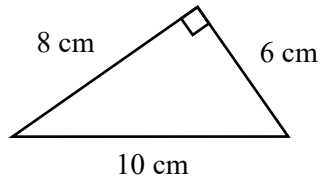
(Total for Question 12 is 3 marks)







13



Work out the area of the triangle.

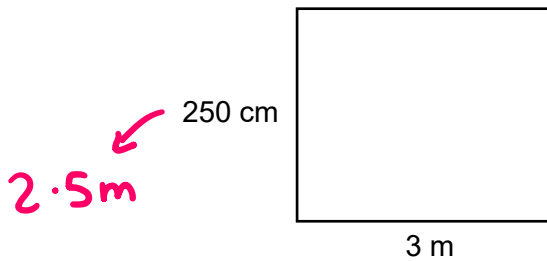
$$\frac{1}{2} \times 8 \times 6$$

24

..... cm<sup>2</sup>

(Total for Question 13 is 2 marks)

14



Work out the area of the rectangle.  
Give your answer in square metres.

$$2.5 \times 3$$

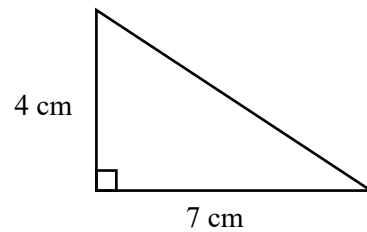
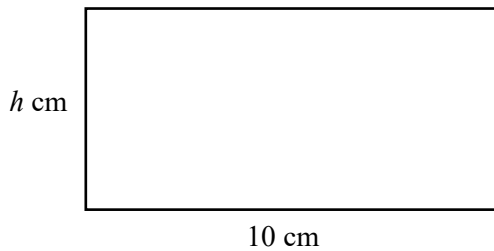
7.5

..... m<sup>2</sup>

(Total for Question 14 is 2 marks)



15 Here is a rectangle and a triangle.



The area of the rectangle is 3 times the area of the triangle.  
Work out  $h$ , the height of the rectangle.

$$\text{Area of triangle} = \frac{1}{2} \times 7 \times 4$$

$$= 14 \text{ cm}^2$$

$$3 \times 14 = 42 \text{ cm}^2$$

$$42 \div 10 = 4.2$$

$$h = 4.2 \text{ cm}$$

(Total for Question 15 is 4 marks)

16 A square has side length 3.2 cm

Work out the area of the square, giving your answer in square centimetres.

$$3.2 \times 3.2$$

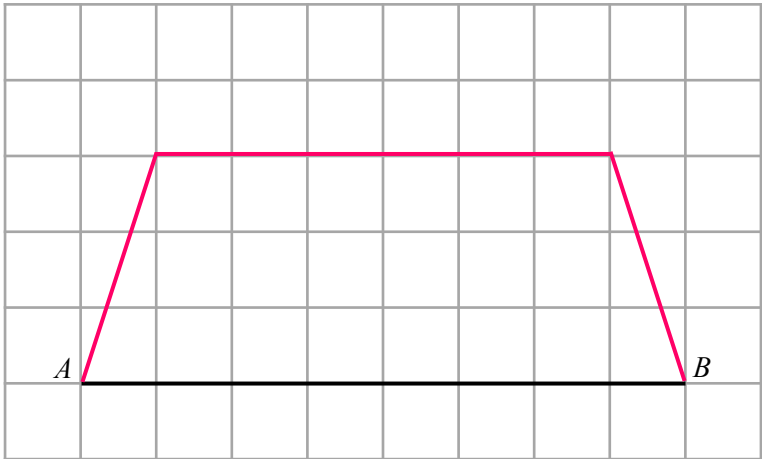
$$\begin{array}{r} 32 \\ 32 \\ \hline 64 \\ 960 \\ \hline 1024 \end{array}$$

$$10.24 \text{ cm}^2$$

(Total for Question 16 is 3 marks)



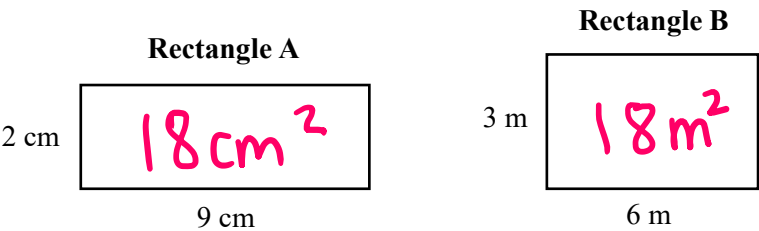
- 17 The line  $AB$  is one side of a trapezium  $ABCD$  which has an area of  $21\text{cm}^2$   
 The line  $AB$  has been drawn on the centimetre grid below.



Complete a possible trapezium  $ABCD$ .

(Total for Question 17 is 2 marks)

- 18 Here are two rectangles.



Aaron says “Rectangle A and rectangle B have the same area”

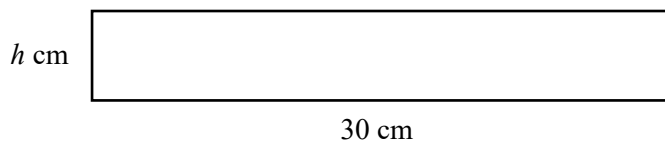
Is Aaron correct?  
 Give a reason for your answer.

No -  $18\text{m}^2$  is bigger than  $18\text{cm}^2$

(Total for Question 18 is 1 mark)



19 A rectangle has a base of 30 cm and a height of  $h$  cm.



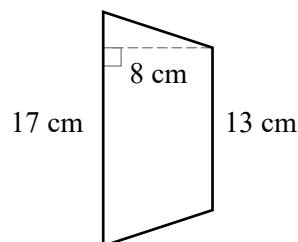
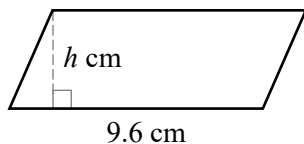
The area of the rectangle is  $15 \text{ cm}^2$   
Work out the value of  $h$ .

$$15 \div 30 = 0.5$$

0.5

..... cm  
(Total for Question 19 is 1 marks)

20 Here is a parallelogram and a trapezium



The area of the parallelogram one fifth of the area of the trapezium  
Work out  $h$ , the perpendicular height of the parallelogram.

$$\begin{aligned}
 & \frac{1}{2}(13 + 17) \times 8 \\
 &= \frac{1}{2}(30) \times 8 \\
 &= 15 \times 8 \\
 &= 120 \text{ cm}^2
 \end{aligned}$$

$$120 \div 5 = 24$$

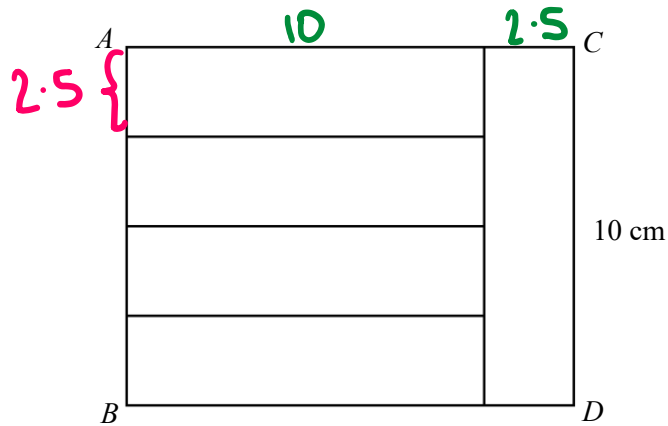
$$24 \div 9.6 = 2.5$$

2.5

..... cm  
(Total for Question 20 is 4 marks)



21 Five congruent rectangles are joined to make rectangle  $ABCD$ .



Work out the area of rectangle  $ABCD$ .

$$10 \div 4 = 2.5$$

$$10 + 2.5 = 12.5$$

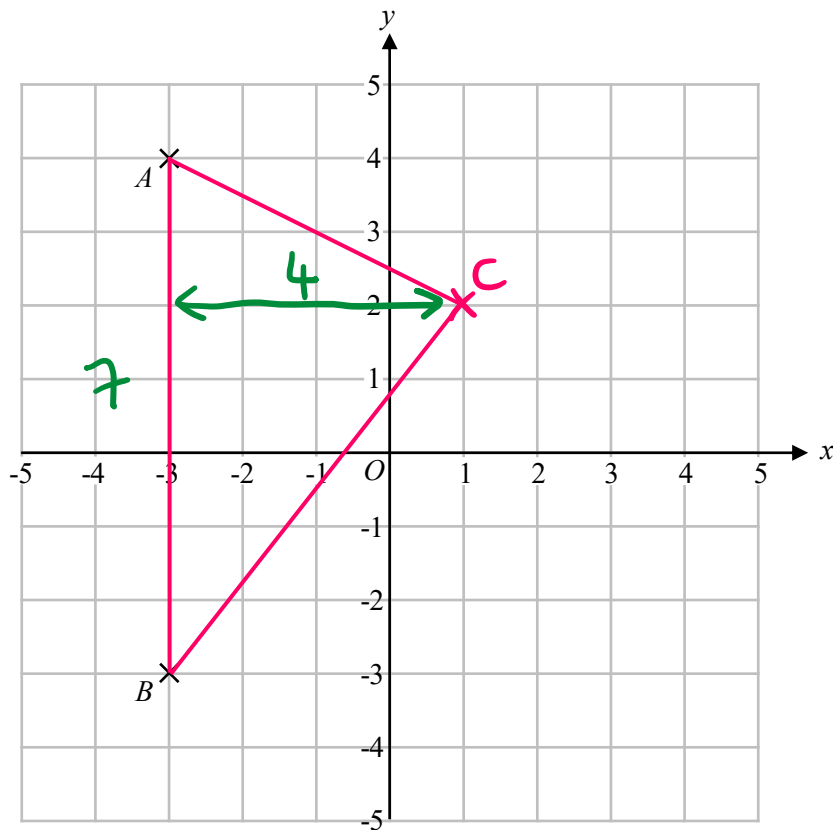
$$12.5 \times 10 = 125$$

125.....cm<sup>2</sup>

(Total for Question 21 is 4 marks)



22 Points  $A$  and  $B$  are shown on the centimetre grid below.



$C = (1, 2)$

Work out the area of triangle  $ABC$ .

$$\frac{1}{2} \times 7 \times 4$$

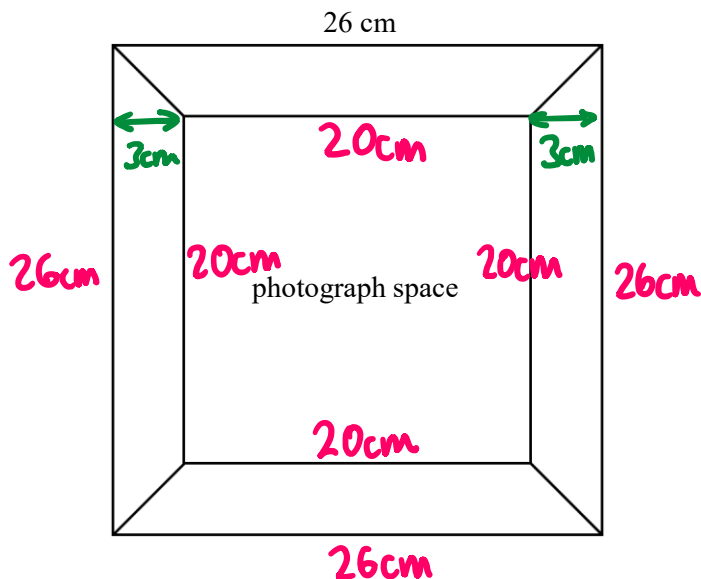
14

.....cm<sup>2</sup>

(Total for Question 22 is 3 marks)



23 A picture frame is made from four congruent trapeziums.



The width of the picture frame is 26 cm.

A square photograph will be placed in the photograph space.

The area of the photograph space is  $400 \text{ cm}^2$

Work out the area of one of the trapeziums that forms the picture frame.

$$\sqrt{400} = 20 \text{ cm}$$

$$26 - 20 = 6$$

$$6 \div 2 = 3$$

$$\begin{aligned}
 & \frac{1}{2} (20 + 26) \times 3 \\
 &= \frac{1}{2} (46) \times 3 \\
 &= 23 \times 3
 \end{aligned}$$

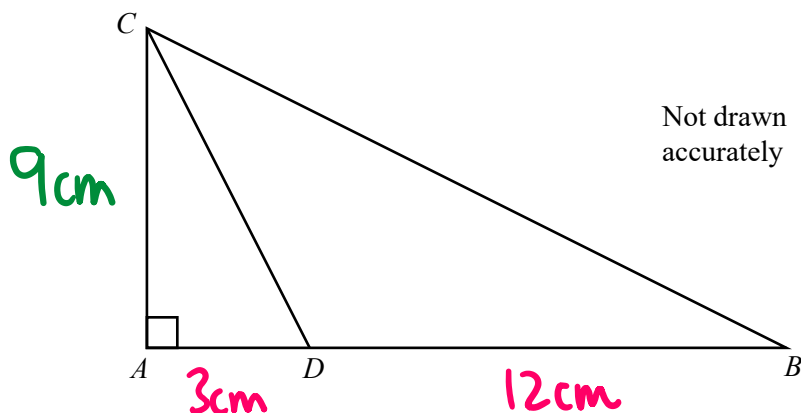
69

.....  $\text{cm}^2$

(Total for Question 23 is 4 marks)



24  $ABC$  is a triangle.



$ABD$  is a straight line.

$$AB = 15 \text{ cm}$$

$$AD : DB = 1 : 4$$

$$AD : AC = 1 : 3$$

Work out the area of triangle  $BCD$ .

$$1 + 4 = 5$$

$$15 \div 5 = 3$$

$$1 \times 3 = 3 \text{ cm}$$

$$4 \times 3 = 12 \text{ cm}$$

$$AD : AC$$

$$\times 3 \left( \begin{array}{l} 1 : 3 \\ 3 : 9 \end{array} \right) \times 3$$

$$AC = 9 \text{ cm}$$

$$\frac{1}{2} \times 12 \times 9 = 54 \text{ cm}^2$$

