



Class
Maths

Video Solutions



PRACTICE PAPER FOR



AQA Paper 1F
(June 2025)



----- Disclaimer -----

This paper has been created based on some of the common paper 1 topics from previous years. The paper should be excellent at helping students revise for exams, however it should not be relied upon as the basis for revision. The topics from this paper may well appear in the real exams, however there is absolutely no guarantee of this. Some topics may appear, some may not. Despite what you might see on social media it is not possible to “predict” the paper. This is usually what people say when they are selling you something...

The best way to prepare for the exams is to **revise all topics**.

You can find a link to this paper and more completely free resources at www.1stclassmaths.com

----- Copyright -----

This paper and all resources hosted on the website www.1stclassmaths.com are free for personal and educational use only.

I do not give permission for reproduction, modification, distribution, or commercial exploitation of these materials in any format including use on third party websites and social media platforms without prior written permission. For permission requests please contact me via email.

Full copyright notice at <https://www.1stclassmaths.com/copyrightnotice>



@1stclassmaths



Answer **all** questions in the spaces provided.

Do not write
outside the
box

1 (a) Write 35% as a decimal. **[1 mark]**

Answer _____

1 (b) Write 0.7 as a fraction. **[1 mark]**

Answer _____

1 (c) Write $\frac{3}{4}$ as a percentage **[1 mark]**

Answer _____

2 Write $\frac{3}{12}$ in its simplest form **[1 mark]**

Answer _____





Do not write
outside the
box

3 Here is a list of numbers.

3 6 8 9 10 40 50

3 (a) Which number in the list is a multiple of 20 ? [1 mark]

Answer _____

3 (b) Which number in the list is a factor of 20 ? [1 mark]

Answer _____

3 (c) Which number in the list is a prime number? [1 mark]

Answer _____

3 (d) Which number in the list is a cube number? [1 mark]

Answer _____

$\frac{\quad}{8}$

Turn over ►





Do not write
outside the
box

5 Write one of the symbols in each of the boxes below.

You may use a symbol more than once.

One has been done for you.

[4 marks]

$$5 \times 2 \quad \boxed{=} \quad 2 \times 5$$

$$5.2 \quad \boxed{} \quad 5.15$$

$$\frac{1}{2} \quad \boxed{} \quad \frac{1}{3}$$

$$2^4 \quad \boxed{} \quad 4^2$$

$$-4 \quad \boxed{} \quad -2$$

Turn over ►





Do not write
outside the
box

6 $x = -10$ $y = -2$

6 (a) Write down the value of $x + 3$ [1 mark]

Answer _____

6 (b) Write down the value of x^2 [1 mark]

Answer _____

6 (c) Write down the value of xy [1 mark]

Answer _____

7 Simplify fully $3a + 2 \times 4a$ [2 marks]

Answer _____





Do not write
outside the
box

8 The table below shows the heights of the players of a netball team.

Player	Height (cm)
Monica	194
Erica	171
Rita	172
Tina	182
Sandra	164
Mary	173
Jessica	171

8 (a) Write down the modal height of the netball players. [1 mark]

Answer _____ cm

8 (b) Work out the median height of the netball players. [2 marks]

Answer _____ cm

8 (c) Work out the range of the heights of the netball players. [2 marks]

Answer _____ cm

10

Turn over ►





Do not write
outside the
box

- 9 Miss Harrison's class has 30 students.
Mr Wilson's class has 32 students.

80% of Miss Harrison's class pass their maths test.

$\frac{3}{8}$ of Mr Wilson's class pass their maths test.

In total, how many students from both classes pass their maths tests? **[4 marks]**

Answer _____

- 10 Layla plays a game.

The probability that she wins the game is 0.95

Work out the probability that Layla does **not** win the game. **[2 marks]**

Answer _____





Do not write
outside the
box

11 Match each calculation on the left with an answer on the right. [3 marks]
One has been done for you.

$\frac{1}{8} - \frac{1}{8}$	0
$\frac{1}{8} + \frac{1}{8}$	$\frac{1}{64}$
$\frac{1}{8} \times \frac{1}{8}$	$\frac{1}{32}$
$\frac{1}{8} \div \frac{1}{8}$	$\frac{1}{8}$
	$\frac{1}{4}$
	1

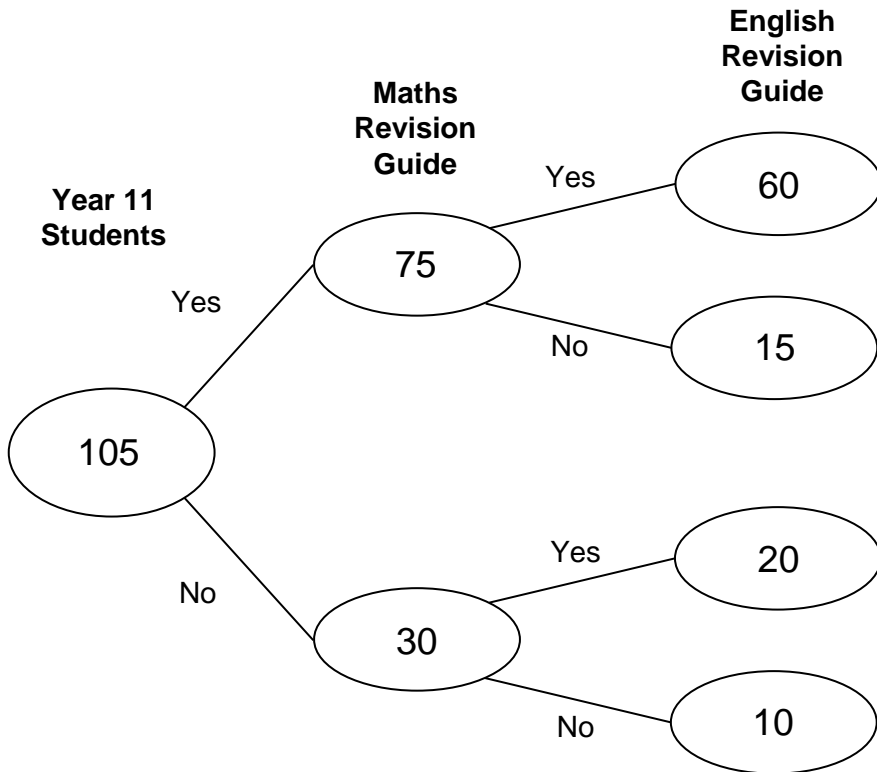
$\frac{1}{9}$

Turn over ►





12 A teacher asks 105 students in Year 11 if they want revision guides for maths and English.



12 (a) One of the Year 11 students is selected at random.

Work out the probability that the student did not want either of the revision guides.

[2 marks]

Answer _____





Do not write outside the box

12 (b) Write down the ratio of the students who
wanted a maths revision guide : did **not** want a maths revision guide

Give your answer in its simplest form. **[2 marks]**

Answer _____ : _____

12 (c) The school decides to buy revision guides for each student that wanted them.
The table below shows the prices of each revision guide.

Maths Revision Guide	£3.00
English Revision Guide	£2.50

Work out how much it will cost the school to buy all the revision guides needed. **[4 marks]**

Answer £ _____

$\frac{\quad}{8}$

Turn over ►





Do not write
outside the
box

13 Two of the angles in a quadrilateral are 40° and 60°

For each statement below, tick the correct box.

[3 marks]

	Could be true	Cannot be true
The other two angles are both acute angles	<input type="checkbox"/>	<input type="checkbox"/>
The other two angles are both obtuse angles	<input type="checkbox"/>	<input type="checkbox"/>
The other two angles are both reflex angles	<input type="checkbox"/>	<input type="checkbox"/>
One of the other two angles is an acute angle and the other is an obtuse angle.	<input type="checkbox"/>	<input type="checkbox"/>
One of the other two angles is an acute angle and the other is a reflex angle.	<input type="checkbox"/>	<input type="checkbox"/>
One of the other two angles is an obtuse angle and the other is a reflex angle.	<input type="checkbox"/>	<input type="checkbox"/>

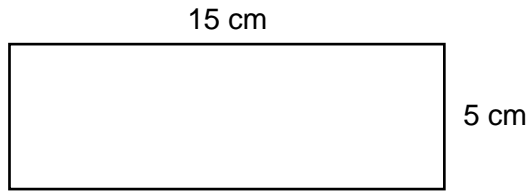




Do not write
outside the
box

14 Here is a rectangle.

Not drawn
accurately



14 (a) Work out the perimeter of the rectangle in inches.

Use 1 inch = 2.5 cm

[3 marks]

Answer _____ inches

14 (b) In fact, 1 inch = 2.54 cm

[1 marks]

What does this mean about the perimeter of the rectangle in inches?

Tick **one** box.

It will be more than the answer to part (a)

It will be the same as the answer to part (a)

It will be less than the answer to part (a)

It is not possible to tell

$\frac{\quad}{7}$

Turn over ►





Do not write
outside the
box

15 Each lap of an athletics track is 400 metres long.
Keeley runs laps of an athletics track until she has run a total of 4 kilometres.
She runs each lap in 80 seconds

15 (a) Work out how long it will take Keeley to run 4 kilometres.
Give your answer in minutes and seconds. **[3 marks]**

Answer _____ minutes _____ seconds

15 (b) Work out Keeley's average speed in metres per second. **[2 marks]**

Answer _____ metres per second



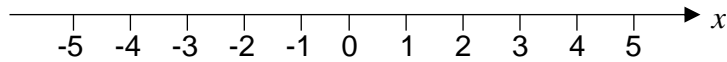


Do not write outside the box

16 (a) Solve $2x + 4 > -2$ **[2 marks]**

Answer _____

16 (b) Represent your answer to part (a) on the number line below. **[2 marks]**



17 A linear sequence starts

2 2.5 3 3.5 4 ...

Work out an expression for the n th term of the sequence. **[2 marks]**

Answer _____

Turn over ►





Do not write
outside the
box

18 Work out $(5.2 \times 10^3) + (2 \times 10^{-2})$

Give your answer as an ordinary number.

[3 marks]

Answer _____

19 Write $\sqrt{100} : \sqrt{16}$ in the form $n : 1$

[2 marks]

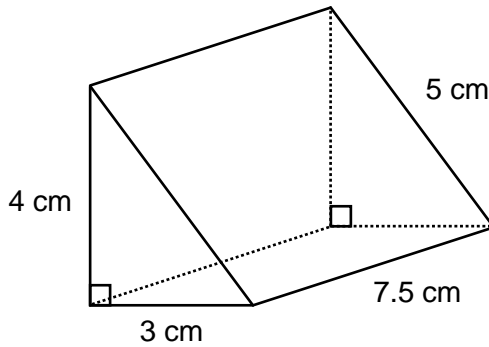
Answer _____ : 1





Do not write outside the box

20 The cross section of a prism is a right-angled triangle.



Not drawn accurately

Work out the volume of the prism.

[3 marks]

Answer _____ cm³

21 The mass of a banana is 120 g correct to the nearest 10 grams. Complete the error interval for the mass of the banana.

[2 marks]

_____ g ≤ mass < _____ g

$\frac{1}{10}$

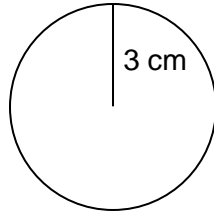




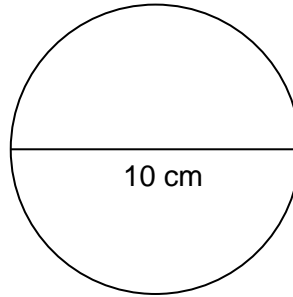
Do not write
outside the
box

22

The radius of **circle A** = 3 cm
The diameter of **circle B** = 10 cm



circle A



circle B

Express the area of **circle A** as a percentage of the area of **circle B**. [3 marks]

Answer _____ %





Do not write
outside the
box

23 Peter, Ray and Winston share some money.

Peter receives 40% of the money.

Ray's money : Winston's money = 1 : 3

Work out Peter's money : Ray's money : Winston's money

Give your answer in its simplest form.

[3 marks]

Answer _____ : _____ : _____

$\frac{\quad}{6}$





Do not write
outside the
box

24 Here is a full bottle of drink and an empty cup.

Bottle



Capacity $2\frac{1}{3}$ litres

Cup



Capacity $\frac{1}{4}$ litre

Lydia pours drink from the full bottle to fill 7 empty cups.

Work out how much drink is left in the bottle.

[3 marks]

Answer _____ litres

END OF QUESTIONS

$\frac{3}{3}$

